
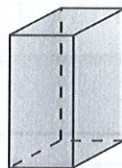
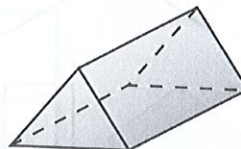
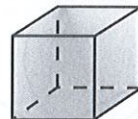
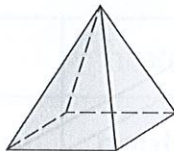


Shape



1. Join each of the solid shapes below to its correct name.

cylinder
cube
triangular prism
cuboid
cone
square-based pyramid



2. Write the number of each of the 3D shapes described below.

a tube-shaped

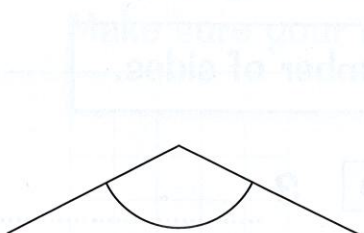
c six square faces


b round base and a pointed top

d shaped like a ball

1. cube	2. sphere	3. cylinder	4. cone
---------	-----------	-------------	---------

3. Put a tick next to the obtuse angles. Circle any right angles.


☐

☐

☐

☐